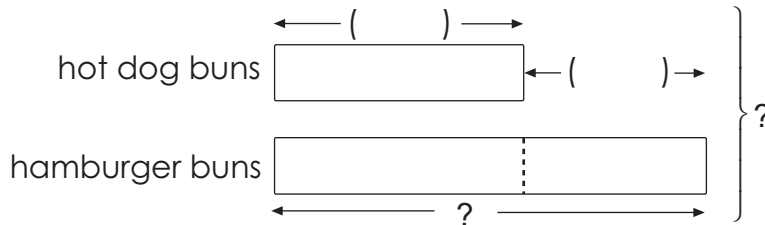
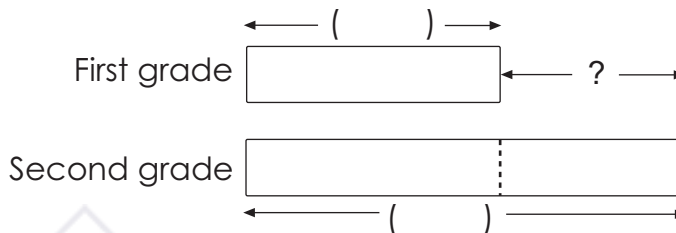


2. For a children's party, Mrs. Lee bought 36 hot dog buns and 24 more hamburger buns than hot dog buns.
- (a) How many hamburger buns did she buy?
- (b) How many buns did she buy in all?




- (a) She bought \_\_\_\_\_ hamburger buns.
- (b) She bought \_\_\_\_\_ buns in all.


3. There are 156 first grade students and 205 second grade students in an elementary school. How many more second grade than first grade students are there?



There are \_\_\_\_\_ more second grade than first grade students.

11.



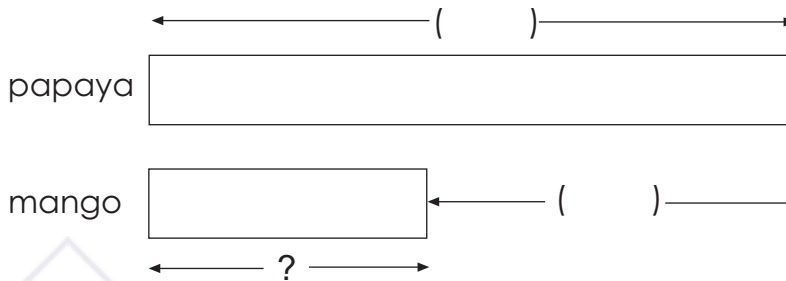
Each  weighs 1 lb. The rock weighs \_\_\_\_\_ lb.

## WORD PROBLEMS

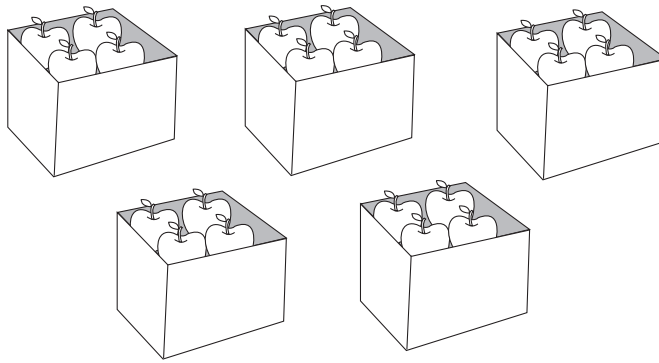


**Solve these problems. Show your work clearly.**

1. A papaya weighs 915 g. It is 530 g heavier than a mango. What is the weight of the mango?




3. Look at the pictures. Fill in the blanks.



- (a) There are \_\_\_\_\_ boxes.
- (b) There are \_\_\_\_\_ apples in each box.
- (c) There are \_\_\_\_\_ apples altogether.
- (d) 5 fours = \_\_\_\_\_ groups of \_\_\_\_\_  
 = \_\_\_\_\_  $\times$  \_\_\_\_\_  
 = \_\_\_\_\_ + \_\_\_\_\_ + \_\_\_\_\_ + \_\_\_\_\_ + \_\_\_\_\_  
 = \_\_\_\_\_

4. Look at the pictures. Fill in the blanks.



- (a) There are \_\_\_\_\_ bags.
- (b) There are \_\_\_\_\_ carrots in each bag.
- (c) There are \_\_\_\_\_ carrots altogether.
- (d) 3 eights = \_\_\_\_\_ groups of \_\_\_\_\_  
 = \_\_\_\_\_  $\times$  \_\_\_\_\_  
 = \_\_\_\_\_ + \_\_\_\_\_ + \_\_\_\_\_  
 = \_\_\_\_\_